



Cambridge IGCSE™

GEOGRAPHY

0460/42

Paper 4 Alternative to Coursework

February/March 2020

INSERT

1 hour 30 minutes

INFORMATION

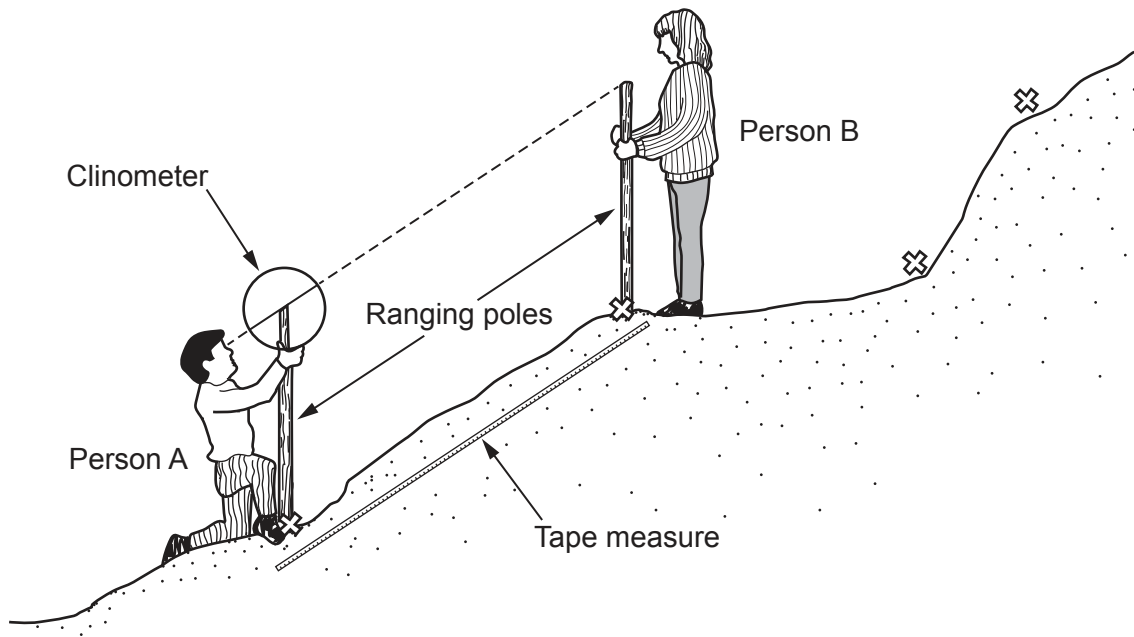
- This insert contains additional resources referred to in the questions.
- You may annotate this insert and use the blank spaces for planning. **Do not write your answers** on the insert.



This document has **12** pages. Blank pages are indicated.

Fig. 1.1 for Question 1

Method of measuring angle of slope



Key

⊗ break of slope

Fig. 1.3 for Question 1

Model profile of sand dunes

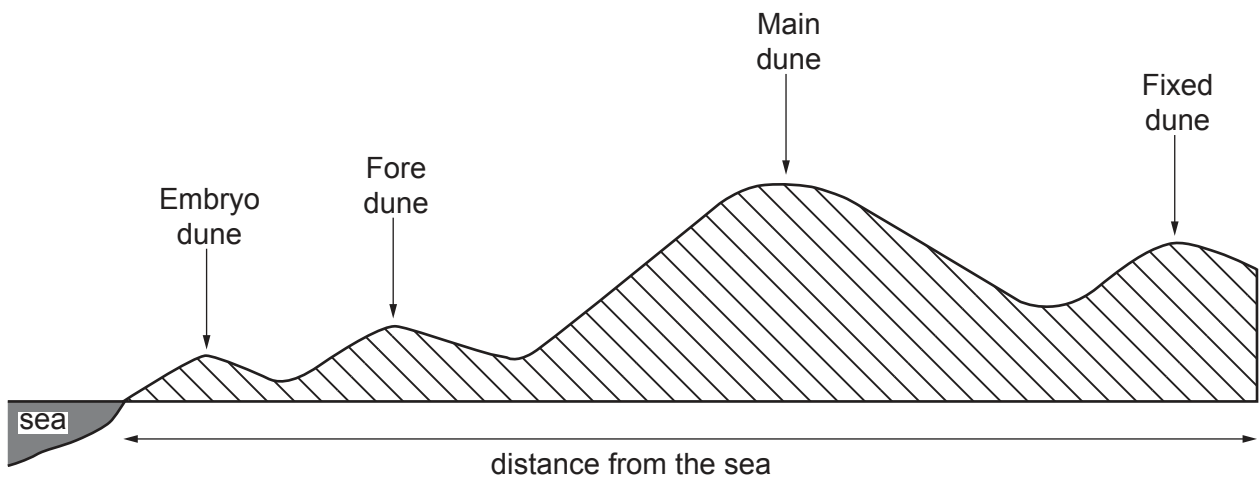


Fig. 1.4 for Question 1

Measuring vegetation cover



Table 1.1 for Question 1

Amount of vegetation cover

Site	Vegetation cover (%)
1	0
2	14
3	60
4	90
5	10
6	30
7	35
8	70
9	100
10	95
11	90
12	20
13	95
14	90

Table 1.2 for Question 1

Number of species

Site	Number of different vegetation species
1	0
2	7
3	2
4	4
5	1
6	2
7	2
8	3
9	3
10	4
11	6
12	3
13	7
14	6

Fig. 1.7 for Question 1

Sand dune protection methods

Method 1



Method 2



Fig. 1.7 for Question 1

Sand dune protection methods

Method 3

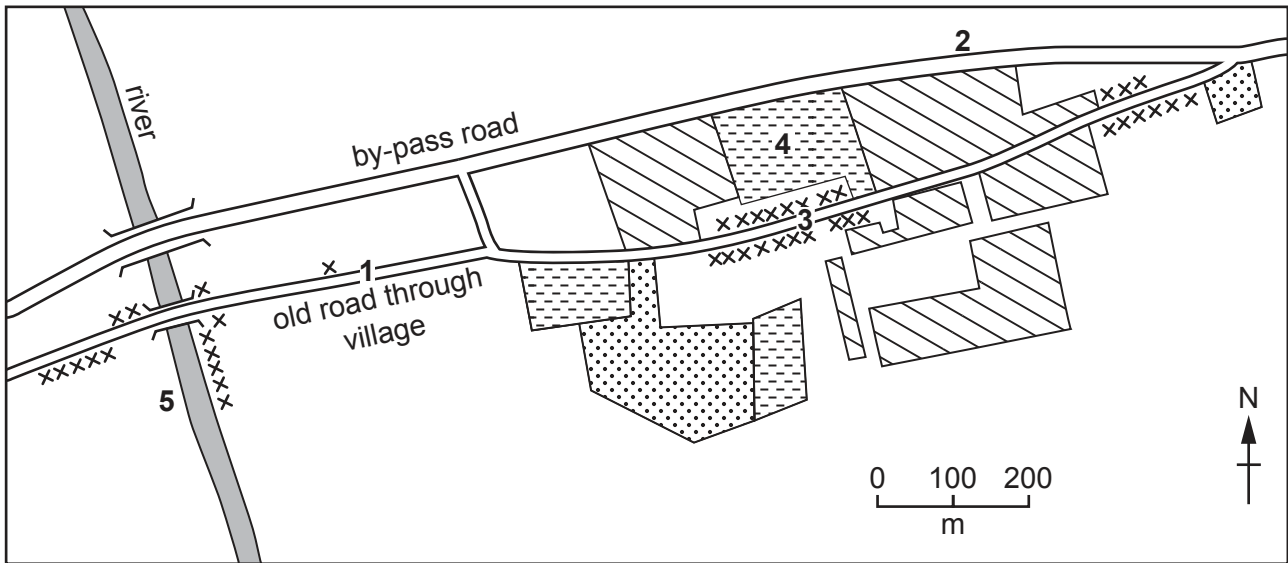


Method 4



Fig. 2.1 for Question 2

Development of the village


**Key**

periods of development

xxxxx original village built before 1960

 built between 1960 and 1985

 built between 1986 and 2005

 built since 2005

1, 2, 3, 4, 5 – possible photograph locations

Fig. 2.2 for Question 2



Fig. 2.3 for Question 2

Resident questionnaire

I am doing this questionnaire as part of my geography coursework. Please will you answer the following questions?

1. Which **one** of the following is the main reason why you live in the village?

Born in the village

Easy access to work

Retired and moved to the village

Peaceful

Attractive scenery

2. If you are employed, where do you work?

.....

Thank you.

Table 2.1 for Question 2

**Answers to Question 1 in the questionnaire:
The main reason why people live in the village**

Reason	Number of answers	Percentage (%)
born in the village	8	11
easy access to work	45	63
retired and moved to the village	11	16
peaceful	5	7
attractive scenery	2	3
	71	100

Table 2.2 for Question 2

**Answers to Question 2 in the questionnaire:
Where employed residents work**

Settlement	Number of people
Beverley	10
Bridlington	6
Driffield	3
Hornsea	1
Hull	16
Tickton (village)	7
York	9

Table 2.3 for Question 2

Village population

Year	Population
1901	229
1911	240
1921	261
1931	402
1941	No census
1951	610
1961	650
1971	752
1981	1053
1991	1486
2001	1618
2011	1731

BLANK PAGE

Permission to reproduce items where third-party owned material protected by copyright is included has been sought and cleared where possible. Every reasonable effort has been made by the publisher (UCLES) to trace copyright holders, but if any items requiring clearance have unwittingly been included, the publisher will be pleased to make amends at the earliest possible opportunity.

To avoid the issue of disclosure of answer-related information to candidates, all copyright acknowledgements are reproduced online in the Cambridge Assessment International Education Copyright Acknowledgements Booklet. This is produced for each series of examinations and is freely available to download at www.cambridgeinternational.org after the live examination series.

Cambridge Assessment International Education is part of the Cambridge Assessment Group. Cambridge Assessment is the brand name of the University of Cambridge Local Examinations Syndicate (UCLES), which itself is a department of the University of Cambridge.